

Virtual Owl Pellet Dissection Worksheet

Owl Pellet

Length: _____

Width: _____

How many of the following bones did you find?

Humerus: _____

Femur: _____

Lower Jaw: _____

Skull: _____

Vertebrae: _____

Shoulder Blade: _____

Ulna/Radius: _____

Ribs: _____

Pelvic Bones: _____

Tibia/Fibia: _____













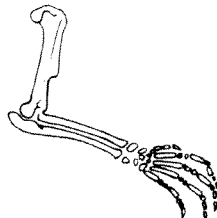
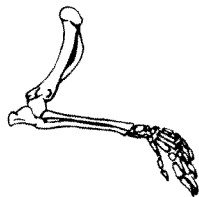
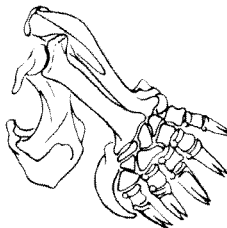
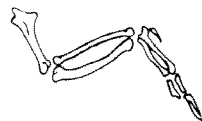
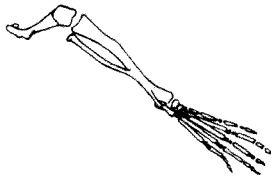
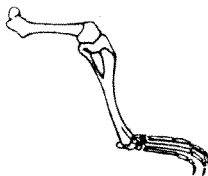

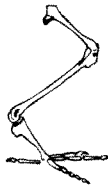
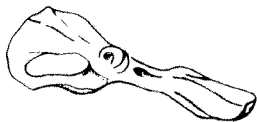






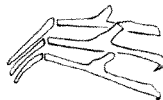
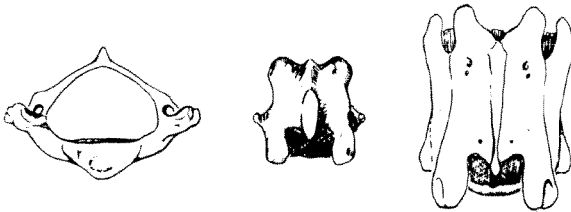
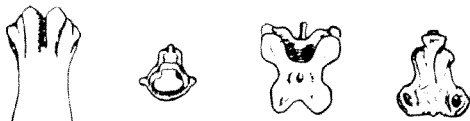
Affix your skeleton in the space provided.

How many animals did this owl eat?

What do the contents in this pellet tell you about the owl's diet?

What habitat do you think this owl would be hunting in?

Owl Pellet Bone Chart

	Rodent	Shrew	Mole	Bird				
Skull								
Jaw								
Scapula								
Forelimb								
Hindlimb								
Pelvic Bone								
Rib								
Vertebrae								

CB280780000